


Bar Charts and Line Graphs

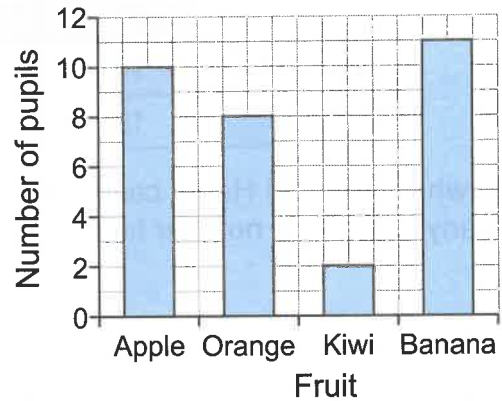
1 Mrs Steel asks each pupil in her class what their favourite fruit is. She uses the bar chart below to show her results.

How many more pupils chose banana than chose kiwi?



How many pupils did she ask in total?

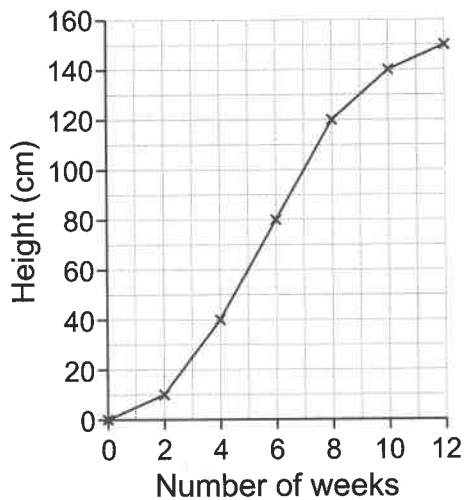




1 mark

1 mark

2 Derren measures the height of a sunflower every two weeks from the day he planted it. His results are shown on the line graph below.



How much did the sunflower grow between the end of week 2 and the end of week 8?

 cm

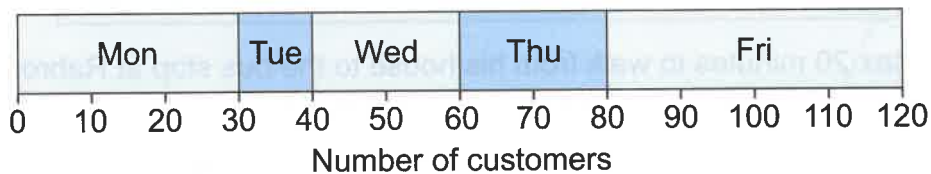
1 mark

Estimate the sunflower's height 9 weeks after it was planted.

 cm

1 mark

3 The chart below shows the number of customers at a cafe over five days.



How many more customers were there on Friday than on Tuesday?



2 marks